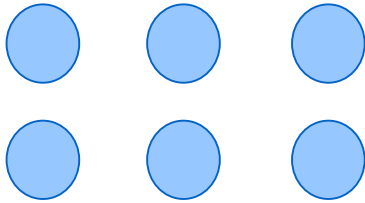


Rows, columns & arrays


Grade 2 Multiplication Worksheet

Fill in the blanks.



2 rows of **3**

$$2 \times 3 = 6$$




_____ rows of _____

$$\text{_____} \times \text{_____} = \text{_____}$$




_____ rows of _____

$$\text{_____} \times \text{_____} = \text{_____}$$



_____ rows of _____

$$\text{_____} \times \text{_____} = \text{_____}$$



_____ rows of _____

$$\text{_____} \times \text{_____} = \text{_____}$$



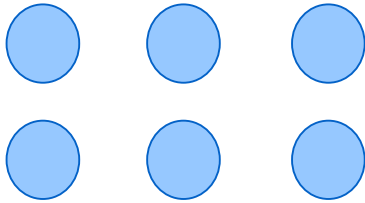
_____ rows of _____

$$\text{_____} \times \text{_____} = \text{_____}$$

Rows, columns & arrays


Grade 2 Multiplication Worksheet

Fill in the blanks.



2 rows of **3**

$$2 \times 3 = 6$$




4 rows of **4**

$$4 \times 4 = 16$$




3 rows of **3**

$$3 \times 3 = 9$$



2 rows of **6**

$$2 \times 6 = 12$$



4 rows of **8**

$$4 \times 8 = 32$$



5 rows of **9**

$$5 \times 9 = 45$$